



Plus im 20er-Feld — knapp unter 20

Schwierig ● ● ●

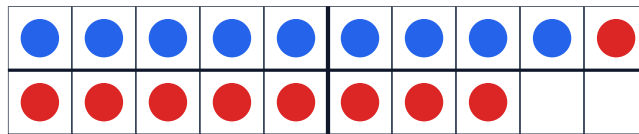
MA.1.A.3 1. Klasse · 2. Klasse

NAME _____ DATUM _____

SO FUNKTIONIERT ES

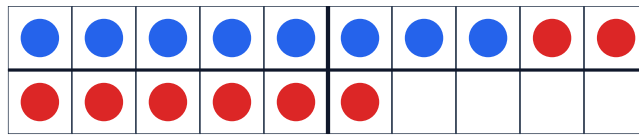
Im 20er-Feld siehst du blaue und rote Punkte. Zähle sie und schreibe die Rechnung unter das Feld.

1



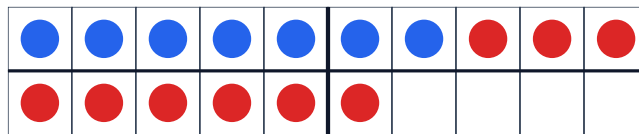
9 + 9 =

2



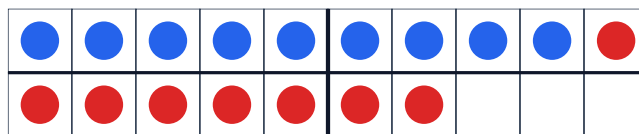
8 + 8 =

3



+ =

4



+ =

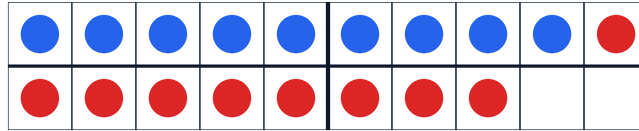


Lösungen

Plus im 20er-Feld — knapp unter 20

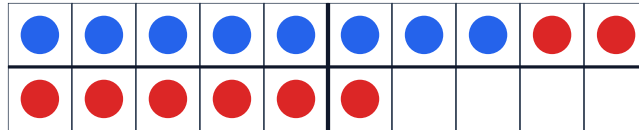
Schwierig ●●●

1



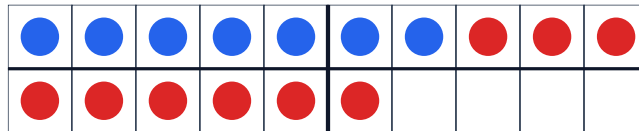
$$9 + 9 = 18$$

2



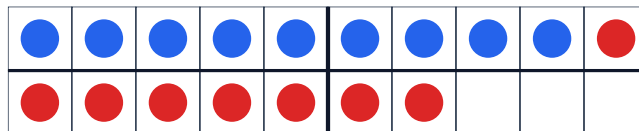
$$8 + 8 = 16$$

3



$$7 + 9 = 16$$

4



$$9 + 8 = 17$$