



Mengen bis 15 erfassen

Mittel ● ●

MA.1.A.1 1. Klasse

NAME _____ DATUM _____

SO FUNKTIONIERT ES

Schau die Punkte kurz an, ohne zu zählen. Wie viele sind es? Schreibe die Zahl in das Kästchen.

1

● ● ●

□

2

● ● ● ● ●

□

3

● ● ● ● ●
● ●

□

4

● ● ● ● ●
● ● ●

□

5

● ● ● ● ●
● ● ● ● ●

□

6

● ● ● ● ●
●

□

7

● ● ● ● ●
● ● ● ● ●
● ●

□

8

● ● ● ● ●
● ● ● ●

□

9

● ● ● ● ●
● ● ● ● ●
● ● ● ● ●

□




Lösungen

Mengen bis 15 erfassen


Mittel ● ●

1




3

2




5

3




7

4




8

5




10

6




6

7




12

8



9

9



15